

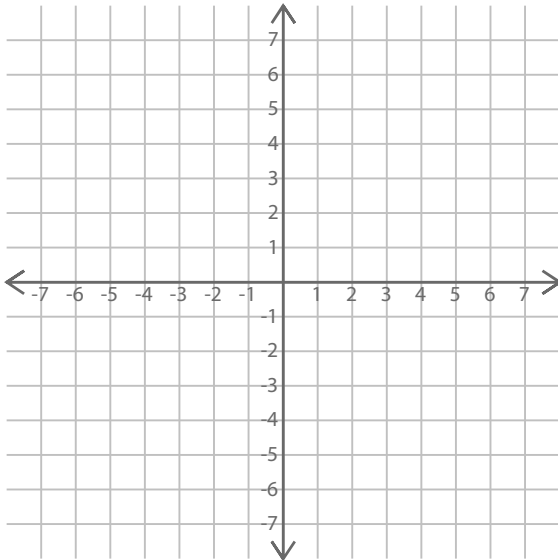


Name : Class :

Plotting and drawing lines

Plot and draw the lines.

1.



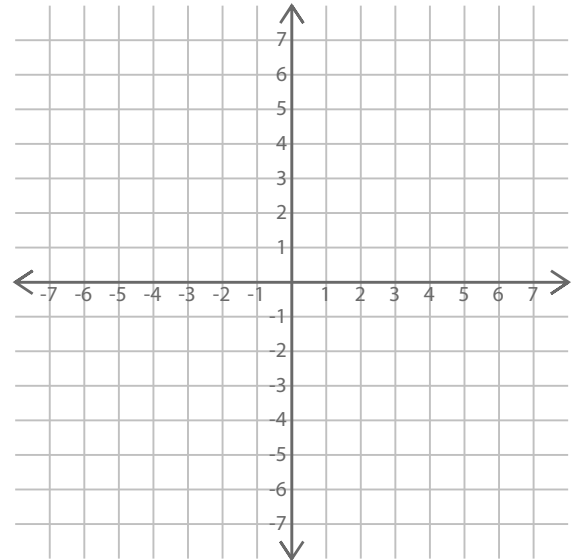
$A = (4, 5)$

$B = (2, 2)$

$C = (0, -1)$

$D = (-2, -4)$

2.



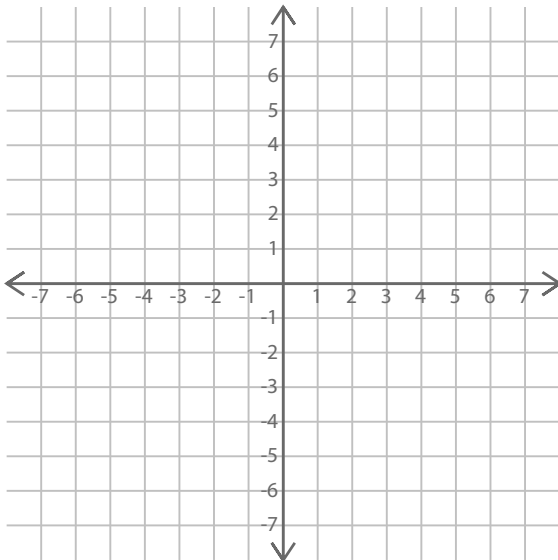
$A = (4, 3)$

$B = (2, 0)$

$C = (-2, -6)$

$D = (0, -3)$

3.



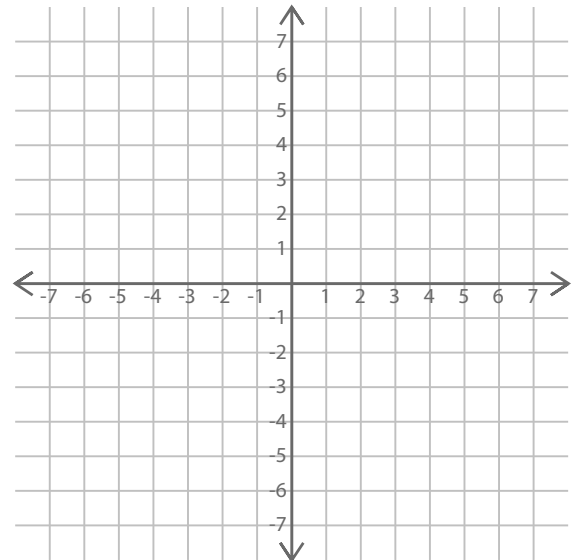
$A = (-3, -4)$

$B = (-1, 2)$

$C = (0, 5)$

$D = (-2, -1)$

4.



$A = (-1, 4)$

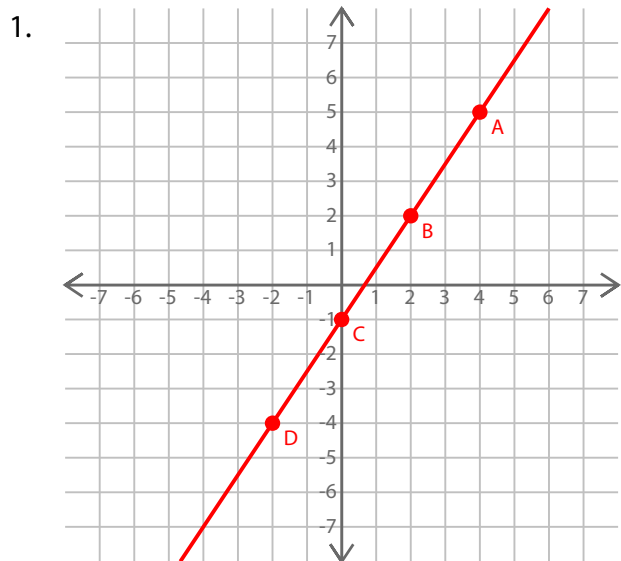
$B = (0, 1)$

$C = (-2, 7)$

$D = (2, -5)$

ANSWER SHEET

Plot and draw the lines.

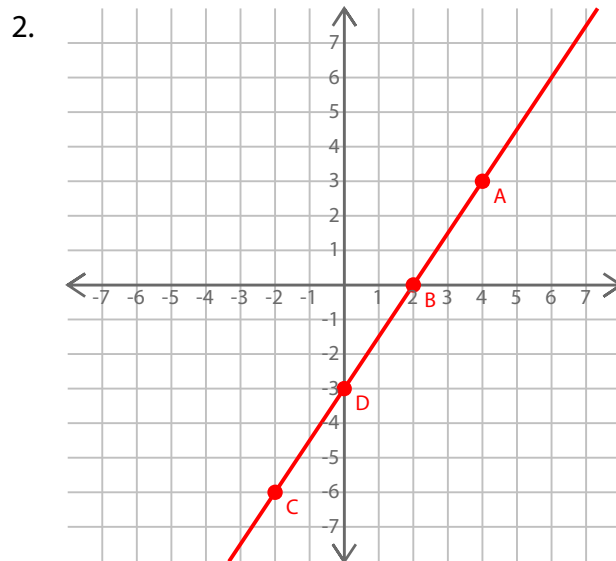


$$A = (4, 5)$$

$$B = (2, 2)$$

$$C = (0, -1)$$

$$D = (-2, -4)$$

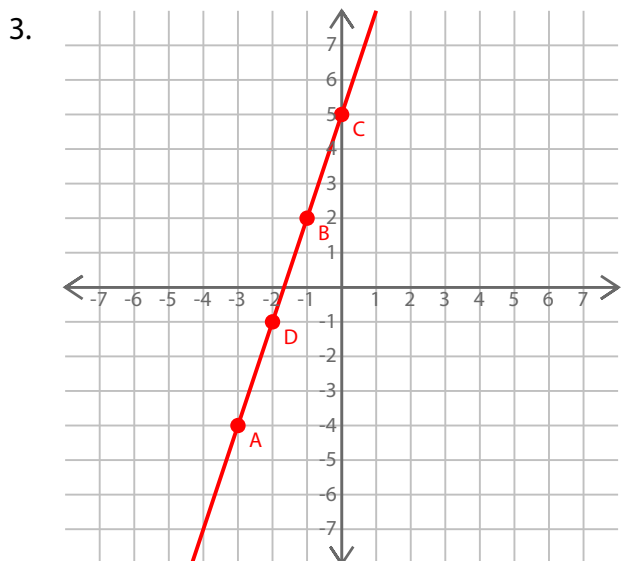


$$A = (4, 3)$$

$$B = (2, 0)$$

$$C = (-2, -6)$$

$$D = (0, -3)$$

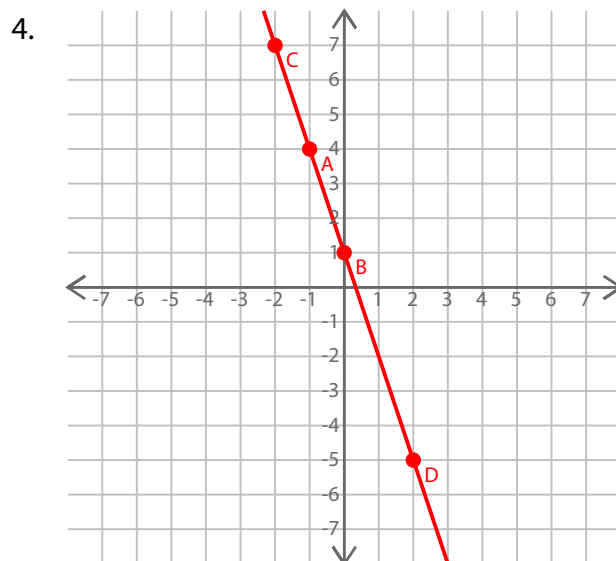


$$A = (-3, -4)$$

$$B = (-1, 2)$$

$$C = (0, 5)$$

$$D = (-2, -1)$$



$$A = (-1, 4)$$

$$B = (0, 1)$$

$$C = (-2, 7)$$

$$D = (2, -5)$$