

Name : Class :


Identifying polygons

Identify the polygons.

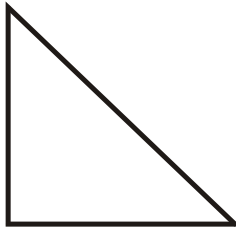
1.



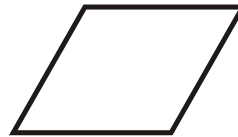
2.




3.



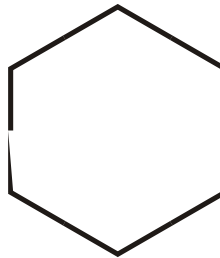
4.



5.



6.



7.



8.



ANSWER SHEET


Identify the polygons.

1.



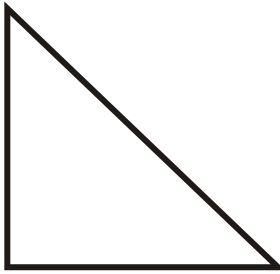
Rectangle $S=4$ $V=4$

2.



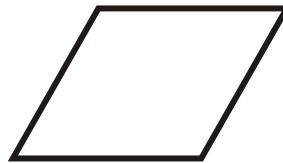
Square $S=4$ $V=4$

3.




Right Triangle $S=3$ $V=3$

4.



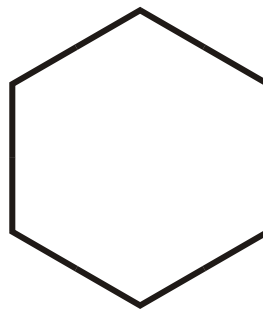
Rhombus $S=4$ $V=4$

5.



Equilateral Triangle $S=3$ $V=3$

6.



Regular Hexagon $S=6$ $V=6$

7.



Trapezoid $S=4$ $V=4$

8.



Parallelogram $S=4$ $V=4$
